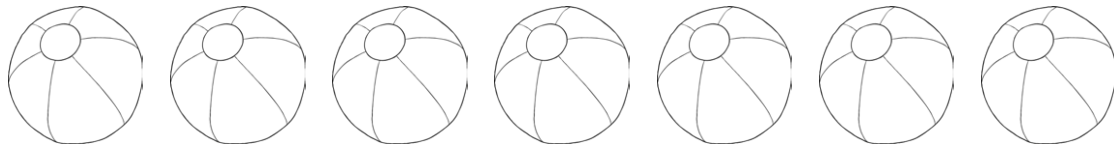


Name:

Date:

Irish Primary School Curriculum 1st Class Maths Assessment

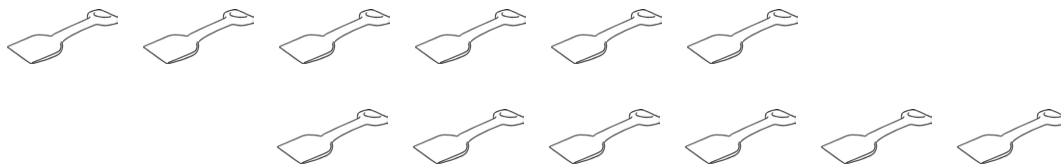
1. Count and write the number of beach balls.



Answer

1 mark

2. Count and write the number of spades.



Answer

1 mark

3. Fill in the blanks.

1, , 3, 4, , 6, , , 9, 10

1 mark

4. $3 + 7 = \square$

1 mark

5. $2 + 6 = \square$

1 mark

6. $2 + 6 = 6 + \square$

1 mark

7. $3 + 2 = 2 + \square$

1 mark

8. Circle the 6th person in the queue.



1 mark

Total for this page

9. Name the person who is 3rd in the queue.



Barry



Lisa



Rebecca



Niall



Mia

Answer

10. $4 + \square = 10$

11. $\square + 12 = 12$

12. $\square + 2 = 9$

13. $14 + 0 = \square$

14. $7 + \square = 7$

15. $6 + 6 = \square$

16. $4 + \square = 8$

17. $2 + 3 + \square = 12$

18. $5 + 4 + \square = 14$

19. $2 + \square + 6 = 13$

20. $\square + \square = 14$



Total for this page

21. $\square + \square = 15$



22. $\square + 2 = 12$



23. $\square + 10 = 12$



24. $12 + 4 = \square$



25. $12 + 2 = \square$



26. $\square + 3 + 3 = 16$



27. What day comes after Monday?

Answer



28. What day comes before Sunday?

Answer



29. Which day is the odd one out? **Sunday, Monday, Wednesday, Friday**


Answer



30.
$$\begin{array}{r} 4 \\ + 8 \\ \hline \end{array}$$



31.
$$\begin{array}{r} 3 \\ + 12 \\ \hline \end{array}$$



32.


$$\begin{array}{r} 4 \\ + 8 \\ \hline 2 \\ \hline \end{array}$$

33. Match the shapes.

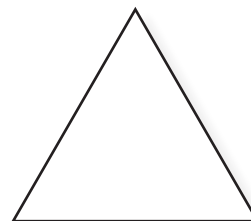
circle




square



rectangle



triangle



circle



1 mark



1 mark



Total for
this page

34. How many sides has a square?

Answer



1 mark

35. How many sides has a circle?

Answer



1 mark

36. How many sides has a rectangle?

Answer



1 mark

37. Bob went to the shop and bought 7 apples. Sarah went to the shop and bought 4 apples. How many apples did they have altogether?

Answer



1 mark

38. Orla had 6 sweets. She needed 13. How many more did she need?

Answer



1 mark

39. If Lisa had 7 toys and bought 2 more, how many did she have in total?

Answer



1 mark

40. Philip bought 7 books for school. He needed 12. How many more did he need?

Answer



1 mark



Total for this page

Answer Sheet: 1st Class Maths Assessment: September to November



question	answer	marks	notes
1. Count the beach balls	7	1	
2. Count the spades	12	1	
3. Fill in the blanks	2,5,7,8	1	
4. $3 + 7 = ?$	10	1	
5. $2 + 6 = ?$	8	1	
6. $2 + 6 = 6 + ?$	2	1	
7. $3 + 2 = 2 + ?$	3	1	
8. Circle the 6th person in the queue	Teacher check	1	
9. Name the person who is 3rd in the queue	Rebecca	1	
10. $4 + ? = 10$	6	1	
11. $? + 12 = 12$	0	1	
12. $? + 2 = 9$	7	1	
13. $14 + 0 = ?$	14	1	
14. $7 + ? = 7$	0	1	
15. $6 + 6 = ?$	12	1	
16. $4 + ? = 8$	4	1	
17. $2 + 3 + ? = 12$	7	1	
18. $5 + 4 + ? = 14$	5	1	
19. $2 + ? + 6 = 13$	5	1	
20. $? + ? = 14$	Teacher check: must equal 14	1	
21. $? + ? = 15$	Teacher check: must equal 15	1	
22. $? + 2 = 12$	10	1	
23. $? + 10 = 12$	2	1	

Answer Sheet: 1st Class Maths Assessment: September to November



24. $12 + 4 = ?$	16	1	
25. $12 + 2 = ?$	14	1	
26. $? + 3 + 3 = 16$	10	1	
27. What day comes after Monday?	Tuesday	1	
28. What day comes before Sunday?	Saturday	1	
29. Which day is the odd one out?	Sunday (it is not a weekday)	1	
30. $4 + 8 =$	12	1	
31. $3 + 12 =$	15	1	
32. $4 + 8 + 2 =$	14	1	
33. Match the shapes.	Teacher check: must match shapes	1	
34. How many sides has a square?	4	1	
35. How many sides has a circle?	0	1	
36. How many corners has a rectangle	4	1	
37. Bob went to the shop and bought 7 apples. Sarah went to the shop and bought 4 apples. How many apples did they have altogether?	11	1	
38. Orla had 6 sweets. She needed 13. How many more did she need?	7	1	
39. If Lisa had 7 toys and bought 2 more, how many did she have in total?	9	1	
40. Philip bought 7 books for school. He needed 12. How many more did he need?	5	1	
		total 40 marks	