

Name:

Date:



Irish Primary School Curriculum 1st Class Maths Assessment

1. + = 18

2. 4 + 8 + = 19

3. 9 + 9 =

4. 3 + 4 + = 20

5. 7 + 3 + = 20

6. 9 + 6 + = 20

7. Draw lines to match the doubles:

| |
|----|
| 10 |
| 3 |
| 2 |
| 4 |
| 6 |
| 9 |
| 8 |
| 7 |
| 5 |
| 1 |

| |
|----|
| 8 |
| 16 |
| 6 |
| 18 |
| 10 |
| 12 |
| 4 |
| 14 |
| 2 |
| 20 |

1 mark

1 mark

1 mark

1 mark

1 mark

1 mark

1 mark

Total for this page

10. Write 6 more than each of these numbers:

8 =

10 =

4 =

9. If Aine bought 12 books in the shop and Emer bought 8, how many books have they altogether?

Answer


10. Write 8 less than each of these numbers

8 =

10 =

12 =

18 =

11. 

How many more apples are there than strawberries?

How many more bananas are there than strawberries?

How many more apples are there than bananas?



1 mark



1 mark



1 mark



1 mark



1 mark



1 mark



1 mark



1 mark



1 mark



1 mark

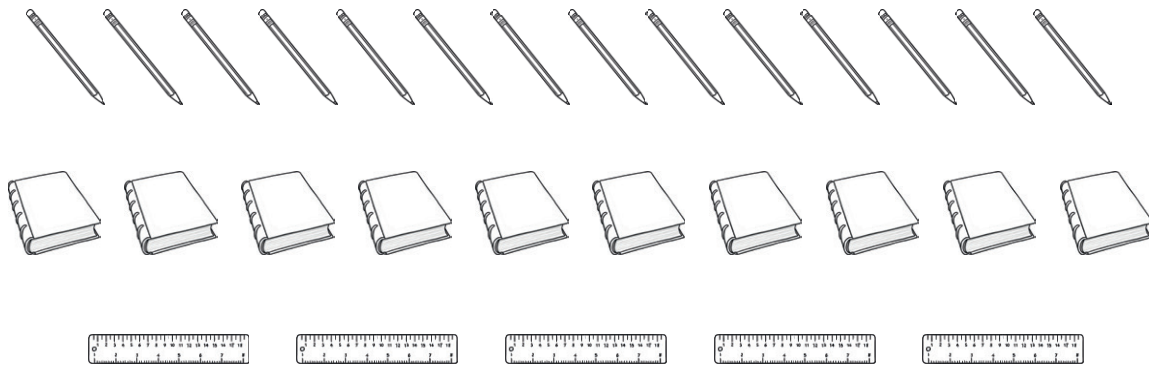


1 mark



Total for this page

12.



How many fewer books are there than pencils?




How many fewer rulers are there than books?

How many fewer rulers are there than pencils?



13.

December

| M | T | W | TH | F | S | S |
|----|----|---|---|----|--|----|
| 1 | 2 | 3 | 4 | 5 | 6 Aoife's Birthday  | 7 |
| 8 | 9 | 10 | 11 | 12 | 13 | 14 |
| 15 | 16 | 17 | 18 | 19 | 20 | 21 |
| 22 | 23 | 24 | 25  | 26 | 27 | 28 |
| 29 | 30 | 31  | | | | |

a. What date is Aoife's birthday?

b. What day is Christmas Day?

c. What day is New Years Eve?

d. How many Mondays are in December?

e. What is the last day of December?

f. What date is the fourth Tuesday of December?



Total for this page

14. + = 20

15. 5 + 6 =

16. 4 + 5 =

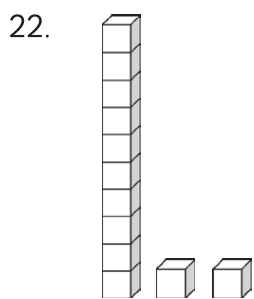
17. 8 + 9 =

18. 12 + 14 = 14 +

19. 18 = tens and units

20. 12 = tens and units

21. 15 = tens and units



How many tens and units?

tens and units



How many tens and units?

tens and units



1 mark



1 mark



1 mark



1 mark



1 mark



1 mark



1 mark




1 mark



1 mark

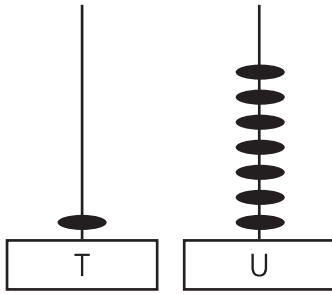


1 mark



Total for this page

24.



How many tens and units?

tens and units

1 mark

25.



Add the coins:

1 mark

26.



Add the coins:

1 mark

27.



Add the coins:

1 mark

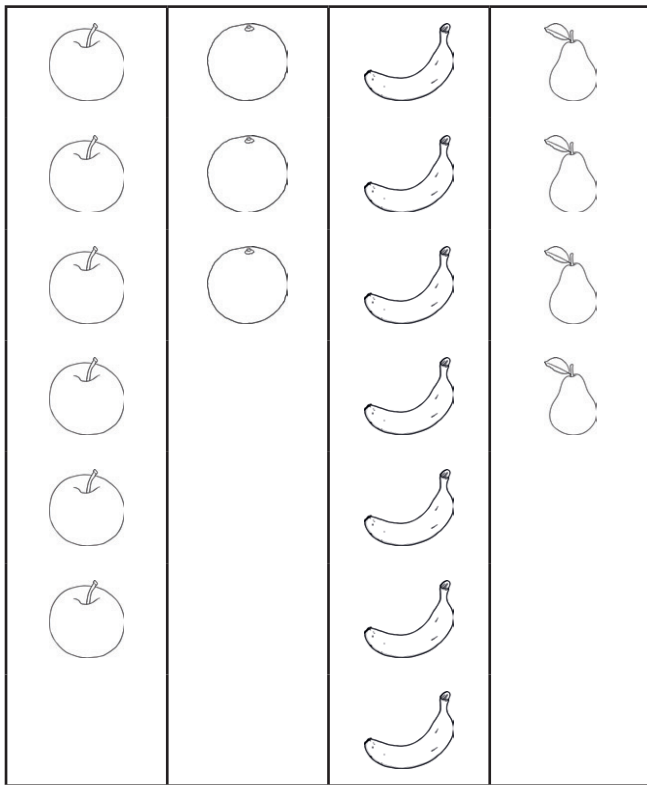
28.

$$5c + 3c + 8c = \text{ }$$

1 mark

Total for this page

29.



A survey was done to see who liked what fruit in the class.

Answer the questions:

a. Which fruit was most popular?

b. Which fruit was least popular?

c. How many children liked apples and oranges?

d. How many more children liked apples than oranges?

e. How many less children liked pears than bananas?



1 mark



1 mark



1 mark



1 mark



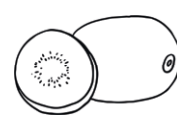
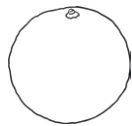
1 mark



Total for this page

30.

| | | | | |
|--|--|--|--|--|
| | | | | |
|--|--|--|--|--|



1 mark

1 mark

1 mark

1 mark

1 mark

Total for this page

Pretend that the results were as follows:

4 children liked apples

7 children liked oranges

2 children liked pears

3 children liked bananas

5 children liked kiwi

Answer Sheet: 1st Class Maths Assessment

November to December



| question | answer | marks | notes | | | | | | | | | | |
|--|--|-------|--------|-------|--------|-------|--------|-------|--------|--------|---------|---|--|
| 1. $? + ? = 18$ | Teacher check – must equal 18 | 1 | | | | | | | | | | | |
| 2. $4 + 8 + ? = 19$ | 7 | 1 | | | | | | | | | | | |
| 3. $9 + 9 = ?$ | 18 | 1 | | | | | | | | | | | |
| 4. $3 + 4 + ? = 20$ | 13 | 1 | | | | | | | | | | | |
| 5. $7 + 3 + ? = 20$ | 10 | 1 | | | | | | | | | | | |
| 6. $9 + 6 + ? = 20$ | 5 | 1 | | | | | | | | | | | |
| 7. Match the doubles | <table border="1"><tr><td>1 – 2</td><td>6 – 12</td></tr><tr><td>2 – 4</td><td>7 – 14</td></tr><tr><td>3 – 6</td><td>8 – 16</td></tr><tr><td>4 – 8</td><td>9 – 18</td></tr><tr><td>5 – 10</td><td>10 – 20</td></tr></table> | 1 – 2 | 6 – 12 | 2 – 4 | 7 – 14 | 3 – 6 | 8 – 16 | 4 – 8 | 9 – 18 | 5 – 10 | 10 – 20 | 1 | |
| 1 – 2 | 6 – 12 | | | | | | | | | | | | |
| 2 – 4 | 7 – 14 | | | | | | | | | | | | |
| 3 – 6 | 8 – 16 | | | | | | | | | | | | |
| 4 – 8 | 9 – 18 | | | | | | | | | | | | |
| 5 – 10 | 10 – 20 | | | | | | | | | | | | |
| 8. Write 6 more than each of these numbers | 14, 16, 10 | 3 | | | | | | | | | | | |
| 9. If Aine bought 12 books in the shop and Emer bought 8, how many books have they altogether? | 20 | 1 | | | | | | | | | | | |
| 10. Write 8 less than each of these numbers | 0, 2, 4, 10 | 4 | | | | | | | | | | | |
| 11. How many more apples are there than strawberries? | 6 | 1 | | | | | | | | | | | |
| How many more bananas are there than strawberries? | 2 | 1 | | | | | | | | | | | |
| How many more apples are there than bananas? | 4 | 1 | | | | | | | | | | | |
| 12. How many fewer books are there than pencils? | 4 | 1 | | | | | | | | | | | |
| How many fewer rulers are there than books? | 5 | 1 | | | | | | | | | | | |
| How many fewer rulers are there than pencils? | 9 | 1 | | | | | | | | | | | |
| 13. What date is Aoife's birthday? | 6th | 1 | | | | | | | | | | | |
| What day is Christmas Day? | Thursday | 1 | | | | | | | | | | | |
| What day is New Years Eve? | Wednesday | 1 | | | | | | | | | | | |

Answer Sheet: 1st Class Maths Assessment:

November to December



| | | | |
|---|-------------------------------|----------------|--|
| How many Mondays are in December? | 5 | 1 | |
| What is the last day of December? | Wednesday | 1 | |
| What date is the fourth Tuesday of December? | 23 | 1 | |
| 14. $? + ? = 20$ | Teacher check – must equal 20 | 1 | |
| 15. $5 + 6 =$ | 11 | 1 | |
| 16. $4 + 5 =$ | 9 | 1 | |
| 17. $8 + 9 =$ | 17 | 1 | |
| 18. $12 + 14 = 14 + ?$ | 12 | 1 | |
| 19. 18 = ___ tens and ___ units | 1 ten and 8 units | 1 | |
| 20. 12 = ___ tens and ___ units | 1 ten and 2 units | 1 | |
| 21. 15 = ___ tens and ___ units | 1 ten and 5 units | 1 | |
| 22. How many tens and units? | 1 ten and 2 units | 1 | |
| 23. How many tens and units? | 1 ten and 6 units | 1 | |
| 24. How many tens and units? | 1 ten and 7 units | 1 | |
| 25. Add the coins | 13c | 1 | |
| 26. Add the coins | 20c | 1 | |
| 27. Add the coins | 17c | 1 | |
| 28. $5c + 3c + 8c =$ | 16c | 1 | |
| 29. Which fruit was most popular? | bananas | 1 | |
| Which fruit was least popular? | oranges | 1 | |
| How many children liked apples and oranges? | 9 | 1 | |
| How many more children liked apples than oranges? | 3 | 1 | |
| How many less children liked pears than bananas? | 3 | 1 | |
| 30. Draw the following results into the chart | Teacher check | 5 | |
| | | total 52 marks | |